

HORA

“TIME”

Capítulo 13

Página 165

Vocabulario - Time

¿Qué hora es? -

Es la... -

Son las... -

Media - $\frac{1}{2}$: y media

Cuarto - $\frac{1}{4}$: y cuarto menos cuarto

Mediodía -

Medianoche -

¿A qué hora? -

A la... -

A las... -

Formula "A": Es la una "y" # of min.
or
"menos"

Formula "B": Son las 2-12 "y" # of min.
hour or
"menos"

Time/Numbers Vocabulary Review

Uno -
Dos -
Tres -
Cuatro -
Cinco -
Seis -
Siete -
Ocho -
Nueve -
Diez -
Once -
Doce -
Trece -
Catorce -
Quince -
Dieciséis -
Diecisiete -
Dieciocho -


Diecinueve -
Veinte -
Veintiuno -
Veintidos -
Veintitres -
Veinticuatro -
Veinticinco -
Veintiseis -
Veintisiete -
Veintiocho -
Veintinueve -

Additional vocabulary:
en punto
de la mañana
de la tarde
de la noche

Telling Time: Hours


Son las / Es la

A clock has two hands. The short hand shows the hours.
When the long hand points to 12, we say o'clock.



The time is 2 o'clock.
2:00

Read the hour hand first. Then read the minute hand. Write the time.




1. _____
2. _____
3. _____

2:00

:

:



4. _____
5. _____
6. _____

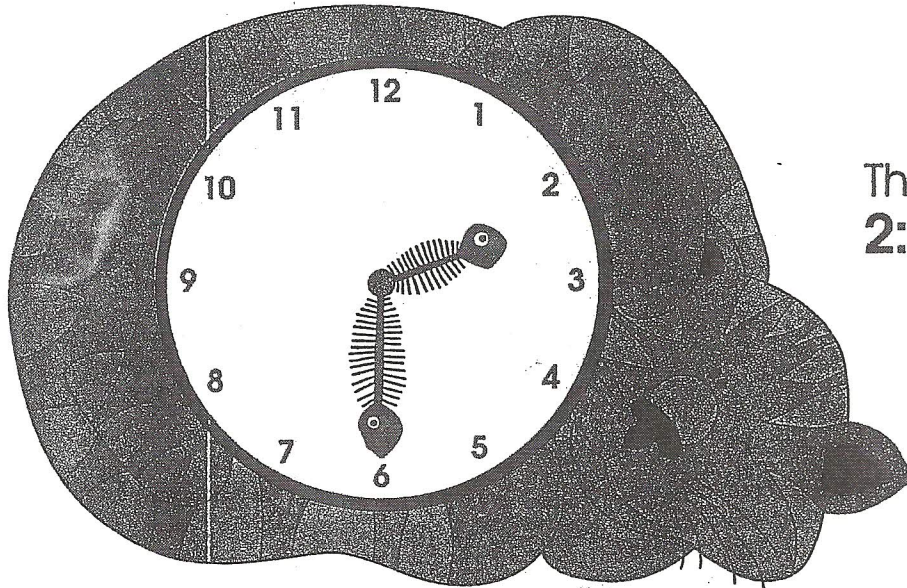
:

:

:

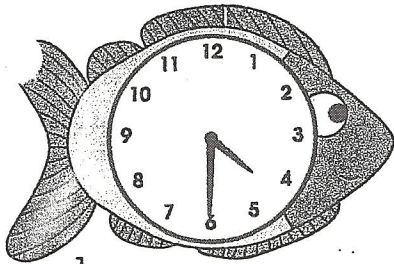
Telling Time: Half Hours y media

The long hand tells the minutes. When the minute hand points to the 6, we say it is half past the hour. The minute hand is halfway around the clock. The hour hand is between 2 and 3.



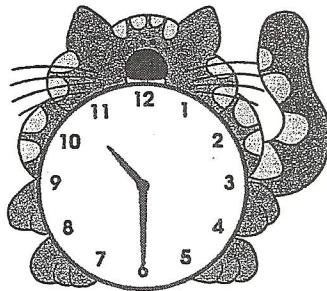
The time is half past 2.
2:30 _____

Read the hour hand first. Then read the minute hand. Write the time.



1.

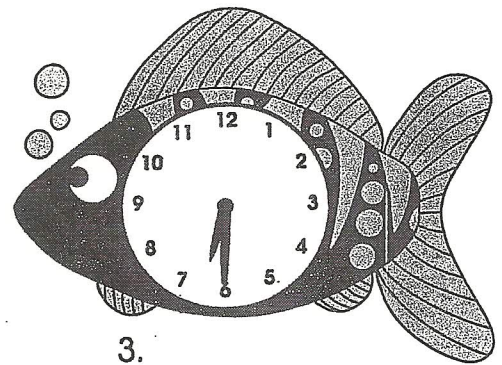
4:30



2.

□


□



3.

□


□



4.

□

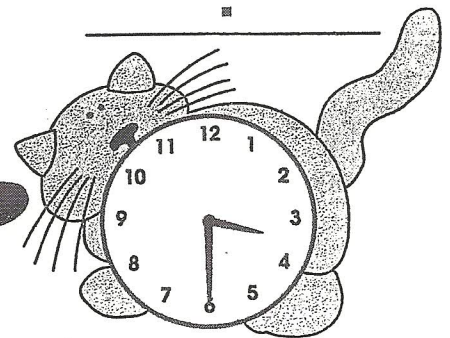
□



5.

□

□



6.


□

□

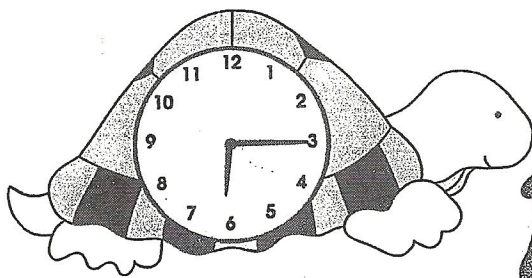
Telling Time: Quarter Past

y cuarto

When the minute hand points to the 3, it is one quarter of the way around the clock. It is quarter past the hour. The hour hand is a little past 2:00.




Read the hour hand first. Then read the minute hand. Write the time.



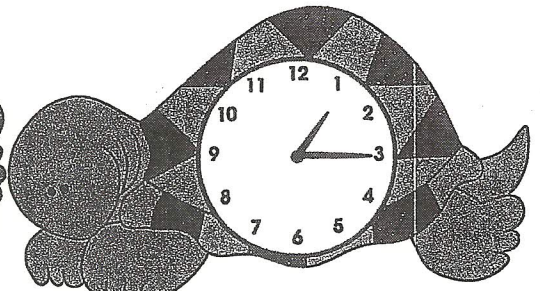
1. _____

6:15



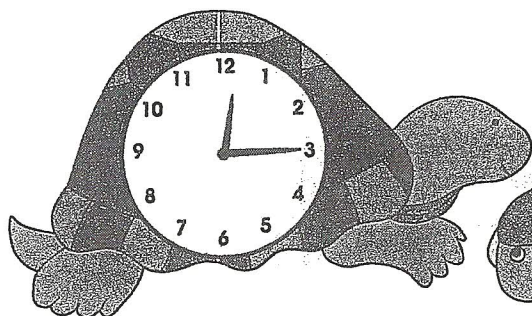
2. _____

⋮




3. _____

⋮




4. _____

⋮



5. _____

⋮



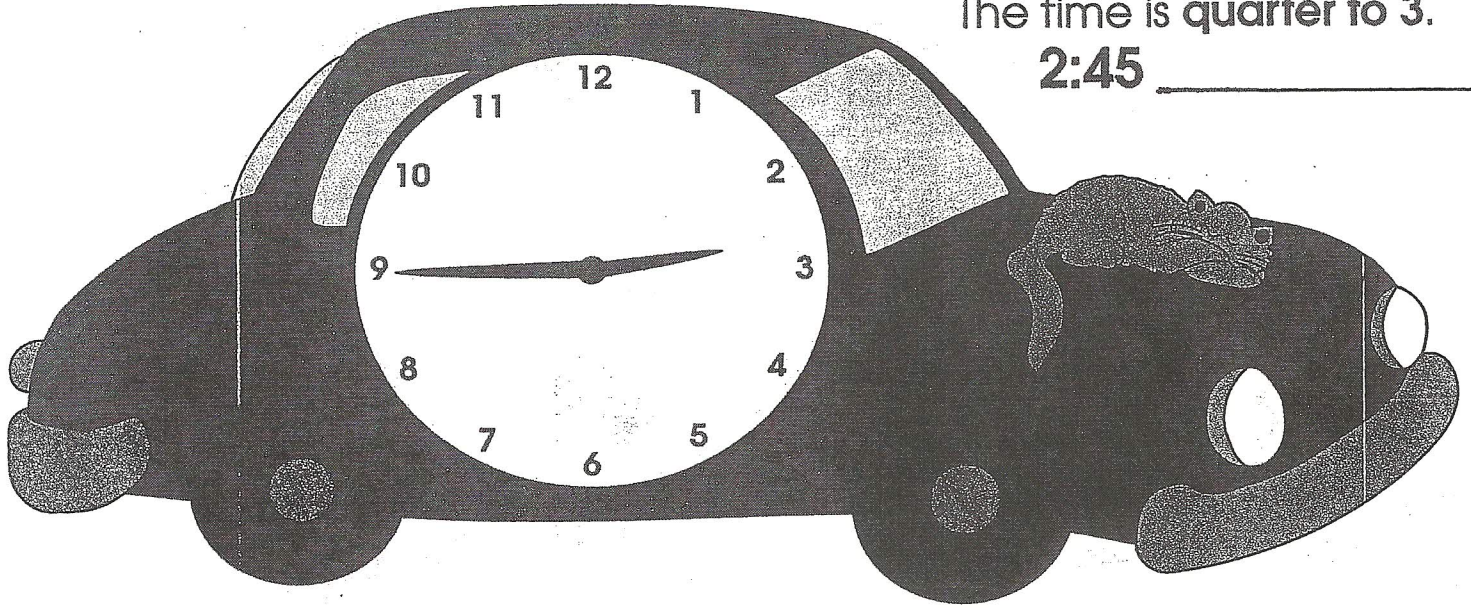
6. _____

⋮


Telling Time: Quarter To menos cuarto

When the minute hand points to 9, it is one quarter to the hour.
The hour hand is almost to the 3.


The time is quarter to 3.
2:45 _____




Read the hour hand first. Then read the minute hand.
Write the time.




1. _____
3:45




2. _____
:




3. _____
:



4. _____
:



5. _____
:



6. _____
:


UNIDAD 8

¿Cómo lo dices?

Nombre _____

A. Hortensia has made a chart to teach her brother how to tell time. Help her finish the chart. Draw a line from the sentence to the right clock. (Careful! There are too many clocks!)

M Son las ocho en punto.



1. Son las cuatro y cinco.




2. Es la una en punto.



3. Son las siete y cuarto.



4. Son las tres y media.



1

Puzzle 2 Acróstico

Write the time in Spanish. Then use the shaded letters to find the title of this puzzle. The last letter has been done for you.

1. 2:00 p.m. _____
_____ 1

2. 4:30 _____ 2

3. 1:15 _____
_____ 3

4. 2:55 _____ 4

5. 1:00 p.m. _____ 5

6. 10:00 p.m. _____
_____ 6

Puzzle Title

1 2 3 4 5 6 J

2

UNIT

13

A Answer each question by circling the letter of the logical choice.

- At what time does the sun rise?
A. a las seis
B. a las diez
- At what time does the sun set?
A. a las dos de la tarde (P.M.)
B. a las siete de la noche (P.M.)
- At what time do you leave for school in the morning?
A. a las cuatro y media
B. a las siete y media
- At what time are you dismissed from school every day?
A. a las tres y cuarto
B. a medianoche
- What time is good for stargazing?
A. a la una de la tarde (P.M.)
B. a la una de la mañana (A.M.)

B ¿Qué hora es? Use numbers and colons to express each time.


Modelo: Son las ocho y media. 8:30

- Son las diez menos cuarto. _____
- Son las veinte horas. _____
- Son las cinco y diecisiete. _____
- Es la una. _____
- Son las doce menos diez. _____
- Son las cuatro y veinte. _____
- Es medianoche. _____
- Es mediodía. _____


4

¡BRAVO! I





1) _____



2) _____



3) _____






4) _____

6) _____

3:20

5) _____

5



1)




12:45

2)

10:10

3)

3:00




4)

12:00



6)

8:35



5)

10:50



7)

7:30

9)

9:15

8)

4:40

6

D Write each time using numbers.

1. Son las diez menos cuarto.

2. Son las tres y media.

3. Son las veinte horas.

4. Son las cinco y diecisiete.

5. Es la una.

6. Es mediodía.

7. Es medianoche.

8. Son las seis y cuarto.
